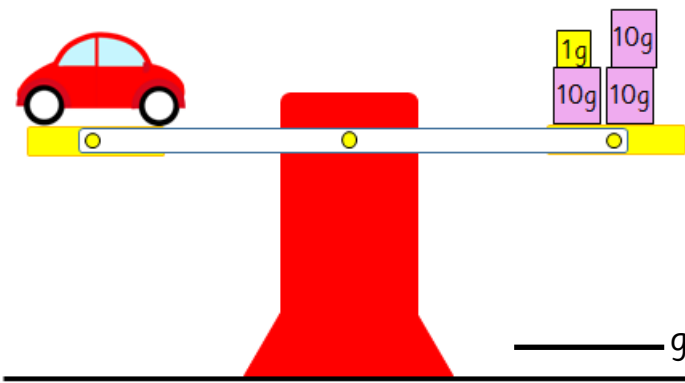
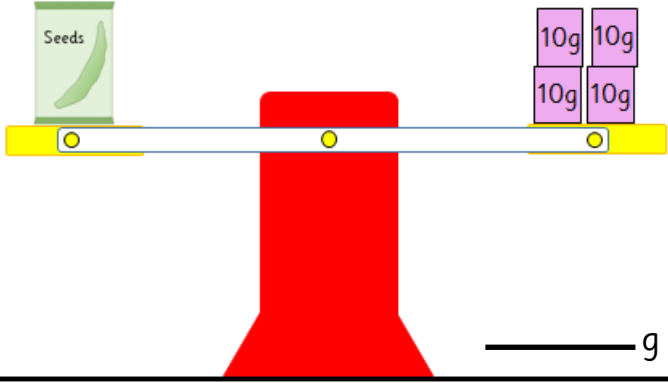
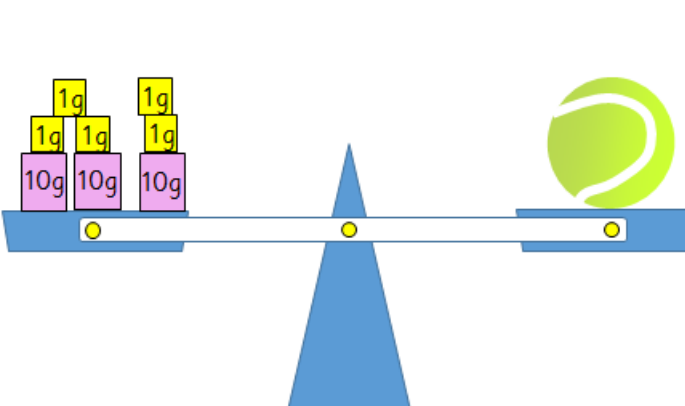
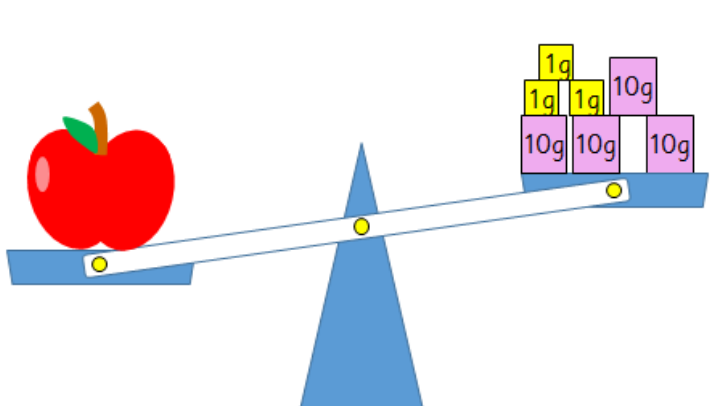


Unit 16: Lesson 1

Name _____

Guided Learning Task 1 (write the mass of the items **that you know**)

 <p>_____ g</p>	 <p>_____ g</p>
 <p>_____ g</p>	 <p>_____ g</p>

Guided Learning Task 2 (fill in the numbers in the number sentences)

$$34g = 30g + \underline{\quad}g$$

$$42g = \underline{\quad}g + 2g$$

$$39g = \underline{\quad}g + \underline{\quad}g$$

Independent Learning (write an item and measure and record its mass)

Item	Mass

Observational check

Can use balance scales and 10g and 1g masses to measure mass

☐