

1 Match the coin to the amount.



20 pence

5 pence

10 pence

1 pound

1 pence

50 pence

2 pence

2 pounds



2 Here are some coins.



Complete the sentences.

There are 1p coins.

There are 2p coins.

There is 5p coin.

There are 10p coins.

There are 20p coins.

2 Here are some coins.



Complete the sentences.

There are 1p coins.









There are 2p coins.

There is 5p coin.

There are 10p coins.

There are 20p coins.

3 Write $<$ or $>$ to compare the amounts.

a)		<input type="text"/>	
b)		<input type="text"/>	
c)		<input type="text"/>	
d)		<input type="text"/>	

4 Mo has one coin in his hand.



I have more than 2 pence,
but less than 1 pound.

Draw Mo's coin.

What is the value of Mo's coin?

Is there more than one answer?